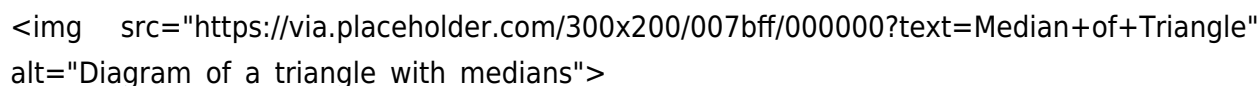


513 Quiz Medians Of A Triangle

Unlocking the Secrets of Triangles: My Journey Through 5.13 Quiz Medians

Have you ever stared blankly at a geometric problem, feeling like you're trapped in a maze of lines and angles? I have. Remember that particular 5.13 quiz on medians of a triangle? It felt like a personal Everest, a mountain of calculations that seemed insurmountable. But, as I tackled it, I discovered that understanding these lines, these seemingly abstract concepts, could unlock a powerful appreciation for the beauty and logic embedded in the world around us.

My initial encounter with medians of a triangle felt like trying to navigate a dense forest with only a flickering flashlight. The formulas were swirling around me, each one promising to illuminate the path, yet leaving me more confused than before. I remember hunched over my textbook, wrestling with the concept of the centroid. It wasn't about memorization; it was about grasping the core idea. That centroid, the point where the medians intersect, was the key, I realized.

A diagram of a triangle with three medians drawn from each vertex to the midpoint of the opposite side. The medians intersect at a single point, the centroid.

The aha moment came when I visualized it. Imagine a triangle – a slice of pizza, if you will. Each median is like a line slicing the pizza directly from a vertex to the midpoint of the opposite side. The centroid? It's the point where the three slices all meet, the culinary center of the triangle. Suddenly, the formulas weren't just abstract symbols; they became tools for understanding the inherent structure of the triangle.

Benefits of Understanding Triangles' Medians (and other triangle properties):

Enhanced Problem-Solving Skills: Medians of a triangle taught me how to break down complex problems into smaller, manageable steps. I realized the power of visualization and how important it was to see the connections.

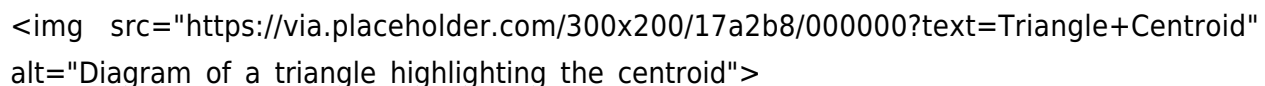
Improved Spatial Reasoning: Working with medians forced me to think critically about the relationships between points, segments, and shapes. My mind became more agile in navigating abstract spatial relationships.

Foundation for Further Mathematical Learning: Understanding medians is a crucial stepping stone in higher-level geometry and even calculus. It's like building a solid foundation for a towering skyscraper of knowledge.

Appreciation for Geometric Harmony: The elegant way medians divide triangles reveals a mathematical harmony that extends far beyond the classroom. It highlights the inherent beauty and order within the universe.

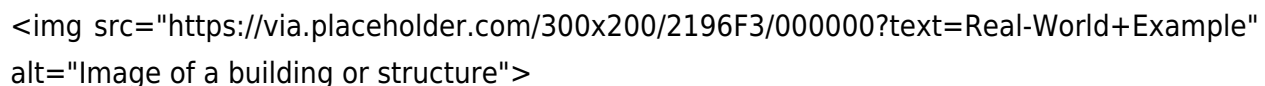
Beyond Medians: Exploring Related Concepts

While focusing on 5.13, I began to appreciate the broader concepts that related to it. The interplay between medians, altitudes, and angle bisectors was fascinating. I began to see how these lines intertwined, creating a rich tapestry of geometric relationships.

A diagram of a triangle with its three medians drawn. The medians intersect at a single point, the centroid. The centroid is highlighted, showing its position as the intersection of the medians.

Real-World Applications:

While medians of triangles seem abstract, they find unexpected applications in fields like civil engineering. Designing structures that are stable and balanced involves understanding equilibrium and symmetry, concepts inherently linked to geometric concepts like medians.

An image of a building or structure, likely a bridge or a tower, illustrating the application of geometric concepts like medians in real-world engineering.

Personal Reflections:

Conquering the 5.13 quiz wasn't about the answer itself; it was about the journey. It was about understanding the underlying principles and developing a powerful toolkit for tackling mathematical challenges. I learned that perseverance and a willingness to visualize were key. Even when things felt overwhelming, taking a step back, visualizing the problem, and seeking clarity proved to be incredibly rewarding.

My personal experience with 5.13 medians of a triangle has shaped how I approach learning. I understand now that even complex concepts can be broken down into smaller, more digestible pieces, and that visualization is a powerful tool.

5 Advanced FAQs about Medians of Triangles:

1. How do medians relate to the centroid's properties? The centroid is the point of concurrency for the medians, dividing each median in a 2:1 ratio.
2. What happens when a triangle is isosceles or equilateral? In isosceles triangles, the medians to the equal sides are congruent; in equilateral triangles, all medians, altitudes, and angle bisectors coincide.
3. How do you apply the concept of medians to solve coordinate geometry problems? You can determine the coordinates of the centroid using the average of the coordinates of the

vertices.

4. Are there other special points within a triangle besides the centroid? Yes, the orthocenter (intersection of altitudes), incenter (intersection of angle bisectors), and circumcenter (intersection of perpendicular bisectors of sides) are other critical points.

5. How do medians contribute to understanding the concept of barycentric coordinates? The barycentric coordinates of a point within a triangle can be expressed in terms of the ratios of the distances from the vertices to the point along the medians.

Remember, the journey of learning is less about the destination and more about the process. My journey through the medians of a triangle provided me with valuable lessons about perseverance and the beauty of mathematical exploration. Now, are you ready to tackle your own geometric Everest?

5.13 Quiz: Medians of a Triangle - A Comprehensive Guide

This guide provides a comprehensive breakdown of finding medians in a triangle, specifically tailored for a 5.13 quiz or similar assessment. We'll cover various approaches, including visual aids, formulas, and practical examples to ensure a strong understanding.

I. Understanding Medians in a Triangle

A median of a triangle is a line segment joining a vertex to the midpoint of the opposite side. Crucially, every triangle has three medians. These medians intersect at a single point called the centroid. The centroid divides each median in a 2:1 ratio, with the segment closer to the vertex being twice as long as the segment closer to the midpoint.

II. Identifying and Constructing Medians

Visual Identification: Recognizing the segments connecting a vertex to the midpoint of the opposite side is key. A visual representation of the triangle and its medians is extremely helpful. Use a ruler and compass to accurately construct midpoints on the opposite sides.

Step-by-Step Construction:

1. Locate the midpoint: Divide the opposite side into two equal segments. Use a ruler to find the precise midpoint.
2. Connect the vertex: Draw a line segment from the vertex to the midpoint you've identified.
3. Repeat for other sides: Construct medians for the remaining two sides.

III. Calculating Median Lengths - Formulas and Techniques

Calculating median lengths directly relies on the coordinates of the vertices.

Using Coordinates: If the coordinates of the vertices are given (e.g., $A(x_1, y_1)$, $B(x_2, y_2)$, $C(x_3, y_3)$):

Midpoint Formula: Calculate the midpoint (M) of the side opposite to the vertex you're considering. Formula: $M((x_1 + x_2)/2, (y_1 + y_2)/2)$

Distance Formula: Use the coordinates of the vertex and the midpoint to find the length of the median. Formula: $\sqrt{(x_2 - x_1)^2 + (y_2 - y_1)^2}$

Example 1: Find the length of the median from vertex A in a triangle with vertices $A(1, 3)$, $B(5, 7)$, and $C(9, 1)$.

1. Midpoint of BC: $M = ((5+9)/2, (7+1)/2) = (7, 4)$
2. Median length: $\sqrt{(7-1)^2 + (4-3)^2} = \sqrt{36 + 1} = \sqrt{37}$

Pythagorean Theorem: In certain right-angled triangles, the median to the hypotenuse is half the length of the hypotenuse.

IV. Special Cases and Relationships

Equilateral Triangles: In equilateral triangles, medians are also altitudes and angle bisectors. The lengths of all three medians are equal.

Isosceles Triangles: In isosceles triangles, the median to the unequal side is perpendicular to that side.

Centroid: The centroid's location is a crucial aspect. It's the intersection of the medians, dividing each median in a 2:1 ratio.

V. Common Pitfalls to Avoid

Incorrect Midpoint Calculation: Carefully find the midpoint of the opposite side; errors here will affect the entire calculation.

Confusing Coordinates: Ensure correct identification of x and y coordinates when using formulas.

Formula Errors: Double-check the formulas for midpoint and distance calculations.

VI. Practice Problems

(Example problems showcasing varying scenarios and difficulty levels for the student to solve)

VII. Summary

Understanding medians in triangles is fundamental in geometry. This guide has provided a robust foundation for identifying, constructing, calculating, and applying the concepts associated with medians. By mastering these techniques and concepts, one can confidently address problems on medians and related topics in various contexts.

VIII. FAQs

1. What is the significance of the centroid? The centroid is the intersection point of the three medians and represents the center of mass or balance point of the triangle.
2. How can I tell if a triangle is equilateral given the medians? If all medians have equal lengths, the triangle is equilateral.
3. What are the properties of medians in a right-angled triangle? The median to the hypotenuse is half the length of the hypotenuse.
4. What is the importance of using accurate constructions in geometry? Accurate constructions help visualize relationships and prevent errors in calculations.
5. How can I apply the concepts of medians to real-world problems? While directly applicable to triangle geometry questions, these principles also undergird concepts in mechanics, statistics (medians as a measure of central tendency), and other mathematical fields.

This guide aims to empower students to navigate 5.13 quiz questions related to medians in a triangle with confidence. By applying the knowledge and practice problems included, students will have a comprehensive understanding of this crucial geometric concept. Remember to practice consistently and review common pitfalls to improve accuracy and performance.

1. Understanding the eBook 513 Quiz Medians Of A Triangle
 - The Rise of Digital Reading 513 Quiz Medians Of A Triangle
 - Advantages of eBooks Over Traditional Books
2. Identifying 513 Quiz Medians Of A Triangle
 - Exploring Different Genres
 - Considering Fiction vs. Non-Fiction

- Determining Your Reading Goals
- 3. Choosing the Right eBook Platform
 - Popular eBook Platforms
 - Features to Look for in an 513 Quiz Medians Of A Triangle
 - User-Friendly Interface
- 4. Exploring eBook Recommendations from 513 Quiz Medians Of A Triangle
 - Personalized Recommendations
 - 513 Quiz Medians Of A Triangle User Reviews and Ratings
 - 513 Quiz Medians Of A Triangle and Bestseller Lists
- 5. Accessing 513 Quiz Medians Of A Triangle Free and Paid eBooks
 - 513 Quiz Medians Of A Triangle Public Domain eBooks
 - 513 Quiz Medians Of A Triangle eBook Subscription Services
 - 513 Quiz Medians Of A Triangle Budget-Friendly Options
- 6. Navigating 513 Quiz Medians Of A Triangle eBook Formats
 - ePub, PDF, MOBI, and More
 - 513 Quiz Medians Of A Triangle Compatibility with Devices
 - 513 Quiz Medians Of A Triangle Enhanced eBook Features
- 7. Enhancing Your Reading Experience
 - Adjustable Fonts and Text Sizes of 513 Quiz Medians Of A Triangle
 - Highlighting and Note-Taking 513 Quiz Medians Of A Triangle
 - Interactive Elements 513 Quiz Medians Of A Triangle
- 8. Staying Engaged with 513 Quiz Medians Of A Triangle
 - Joining Online Reading Communities
 - Participating in Virtual Book Clubs
 - Following Authors and Publishers 513 Quiz Medians Of A Triangle
- 9. Balancing eBooks and Physical Books 513 Quiz Medians Of A Triangle
 - Benefits of a Digital Library
 - Creating a Diverse Reading Collection 513 Quiz Medians Of A Triangle
- 10. Overcoming Reading Challenges
 - Dealing with Digital Eye Strain
 - Minimizing Distractions
 - Managing Screen Time
- 11. Cultivating a Reading Routine 513 Quiz Medians Of A Triangle
 - Setting Reading Goals 513 Quiz Medians Of A Triangle
 - Carving Out Dedicated Reading Time
- 12. Sourcing Reliable Information of 513 Quiz Medians Of A Triangle

- Fact-Checking eBook Content of 513 Quiz Medians Of A Triangle
- Distinguishing Credible Sources

13. Promoting Lifelong Learning

- Utilizing eBooks for Skill Development
- Exploring Educational eBooks

14. Embracing eBook Trends

- Integration of Multimedia Elements
- Interactive and Gamified eBooks

How do I know which eBook platform is the best for me? Finding the best eBook platform depends on your reading preferences and device compatibility. Research different platforms, read user reviews, and explore their features before making a choice. Are free eBooks of good quality? Yes, many reputable platforms offer high-quality free eBooks, including classics and public domain works. However, make sure to verify the source to ensure the eBook credibility. Can I read eBooks without an eReader? Absolutely! Most eBook platforms offer web-based readers or mobile apps that allow you to read eBooks on your computer, tablet, or smartphone. How do I avoid digital eye strain while reading eBooks? To prevent digital eye strain, take regular breaks, adjust the font size and background color, and ensure proper lighting while reading eBooks. What the advantage of interactive eBooks? Interactive eBooks incorporate multimedia elements, quizzes, and activities, enhancing the reader engagement and providing a more immersive learning experience. 513 Quiz Medians Of A Triangle is one of the best book in our library for free trial. We provide

copy of 513 Quiz Medians Of A Triangle in digital format, so the resources that you find are reliable. There are also many Ebooks of related with 513 Quiz Medians Of A Triangle. Where to download 513 Quiz Medians Of A Triangle online for free? Are you looking for 513 Quiz Medians Of A Triangle PDF? This is definitely going to save you time and cash in something you should think about.

In today's digital age, the availability of 513 Quiz Medians Of A Triangle books and manuals for download has revolutionized the way we access information. Gone are the days of physically flipping through pages and carrying heavy textbooks or manuals. With just a few clicks, we can now access a wealth of knowledge from the comfort of our own homes or on the go. This article will explore the advantages of 513 Quiz Medians Of A Triangle books and manuals for download, along with some popular platforms that offer these resources. One of the significant advantages of 513 Quiz Medians Of A Triangle books and manuals for download is the cost-saving aspect. Traditional books and manuals can be costly, especially if you need

to purchase several of them for educational or professional purposes. By accessing 513 Quiz Medians Of A Triangle versions, you eliminate the need to spend money on physical copies. This not only saves you money but also reduces the environmental impact associated with book production and transportation. Furthermore, 513 Quiz Medians Of A Triangle books and manuals for download are incredibly convenient. With just a computer or smartphone and an internet connection, you can access a vast library of resources on any subject imaginable. Whether you're a student looking for textbooks, a professional seeking industry-specific manuals, or someone interested in self-improvement, these digital resources provide an efficient and accessible means of acquiring knowledge. Moreover, PDF books and manuals offer a range of benefits compared to other digital formats. PDF files are designed to retain their formatting regardless of the device used to open them. This ensures that the content appears exactly as intended by the author, with no loss of formatting or missing graphics. Additionally, PDF files can be easily annotated, bookmarked, and searched for specific terms, making them highly practical for studying or referencing. When it comes to accessing 513 Quiz Medians Of A Triangle books and manuals, several platforms offer an extensive collection of resources. One such platform is Project Gutenberg, a nonprofit organization that provides over 60,000 free eBooks. These books are

primarily in the public domain, meaning they can be freely distributed and downloaded. Project Gutenberg offers a wide range of classic literature, making it an excellent resource for literature enthusiasts. Another popular platform for 513 Quiz Medians Of A Triangle books and manuals is Open Library. Open Library is an initiative of the Internet Archive, a non-profit organization dedicated to digitizing cultural artifacts and making them accessible to the public. Open Library hosts millions of books, including both public domain works and contemporary titles. It also allows users to borrow digital copies of certain books for a limited period, similar to a library lending system. Additionally, many universities and educational institutions have their own digital libraries that provide free access to PDF books and manuals. These libraries often offer academic texts, research papers, and technical manuals, making them invaluable resources for students and researchers. Some notable examples include MIT OpenCourseWare, which offers free access to course materials from the Massachusetts Institute of Technology, and the Digital Public Library of America, which provides a vast collection of digitized books and historical documents. In conclusion, 513 Quiz Medians Of A Triangle books and manuals for download have transformed the way we access information. They provide a cost-effective and convenient means of acquiring knowledge, offering the ability to access a vast library of resources at our fingertips. With platforms like Project

Gutenberg, Open Library, and various digital libraries offered by educational institutions, we have access to an ever-expanding collection of books and manuals. Whether for educational, professional, or personal purposes, these digital resources serve as

valuable tools for continuous learning and self-improvement. So why not take advantage of the vast world of 513 Quiz Medians Of A Triangle books and manuals for download and embark on your journey of knowledge?